





CONTAMOS DECENAS HASTA EL 50


1. Encierra grupos de 10 y escribe cuántas decenas hay:



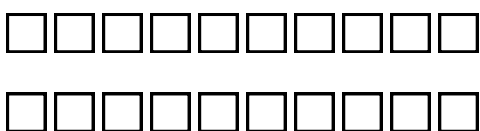
= decenas



= decenas



= decenas



= decenas

Contamos decenas:

10
diez

20
veinte

30
treinta

40
cuarenta

50
cincuenta

2. Escribe como se leen los numerales:

30

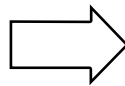
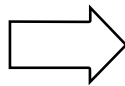
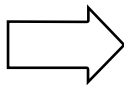
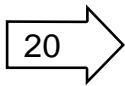
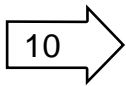
20

40

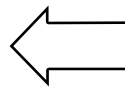
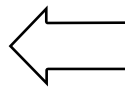
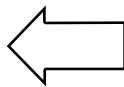
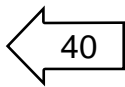
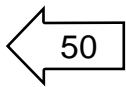
50

3. Continúa la serie en forma...

Ascendente:



Descendente:



4. Relaciona cada número con su nombre:



veinte

cuarenta

cincuenta

diez

treinta

5. Representa en forma gráfica los T.V.P. Escribe sus nombres:

D	U
4	5

Se lee:

D	U
3	2

Se lee:

D	U
1	8

Se lee:

D	U
2	7

Se lee:

D	U
4	3

Se lee:

D	U
3	5

Se lee:

D	U
2	9

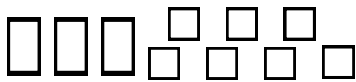
Se lee:

Recuerda:

El representa a las

El representa a las

6. Cuenta y ubica en el T.V.P. Escribe el nombre de los numerales:



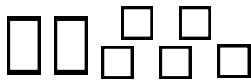
D	U

Se lee:



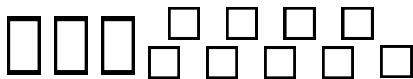
D	U

Se lee:



D	U

Se lee:



D	U

Se lee:

7. Ordena los numerales y escribe el numeral correctamente:

$8 \text{ U} + 3 \text{ D} = \boxed{}$

$4 \text{ D} + 6 \text{ U} = \boxed{}$

$4 \text{ U} + 4 \text{ D} = \boxed{}$

$4 \text{ D} + 2 \text{ U} = \boxed{}$

$5 \text{ U} + 2 \text{ D} = \boxed{}$

$9 \text{ U} + 3 \text{ D} = \boxed{}$

$2 \text{ U} + 1 \text{ D} = \boxed{}$

$6 \text{ U} + 3 \text{ D} = \boxed{}$

$1 \text{ D} + 8 \text{ U} = \boxed{}$



TAREA DOMICILIARIA

1. En tu cuaderno escribe de 1 en 1 del 0 al 50.

2. Continúa los numerales:

