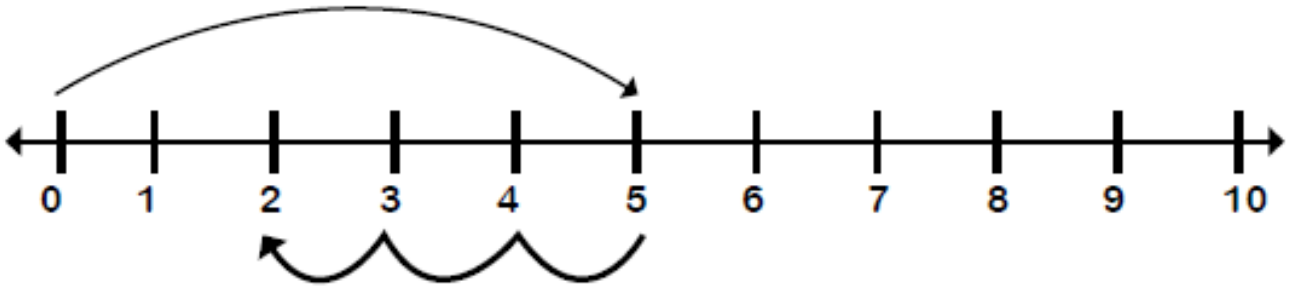


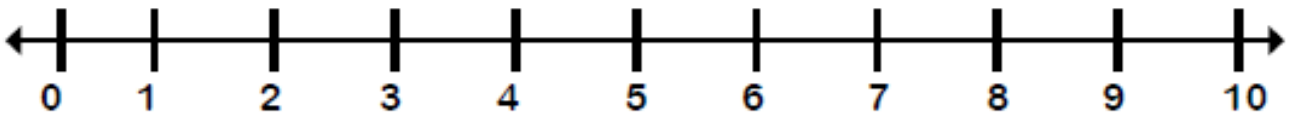


MEDIDAS ARBITRARIAS

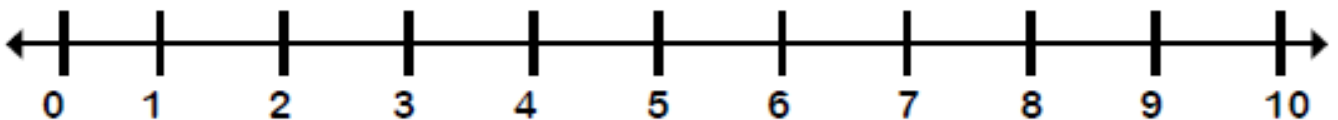
- Escribe la respuesta en el recuadro que se encuentra a la derecha.



$$\boxed{5} - \boxed{3} = \boxed{2}$$



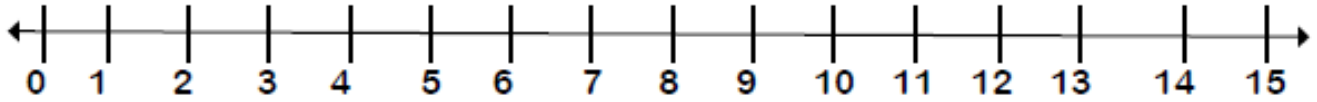
$$\boxed{9} - \boxed{5} = \boxed{}$$



$$\boxed{7} - \boxed{2} = \boxed{}$$

RESTA EN LA RECTA NUMÉRICA

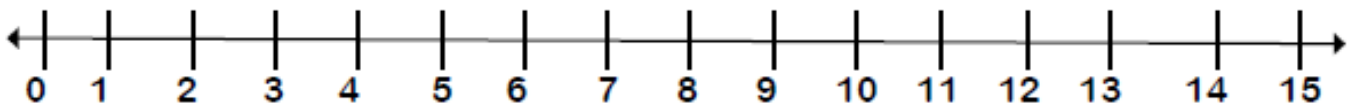
- Escribe la respuesta en el recuadro que se encuentra a la derecha.



$$\boxed{15} - \boxed{5} = \boxed{}$$



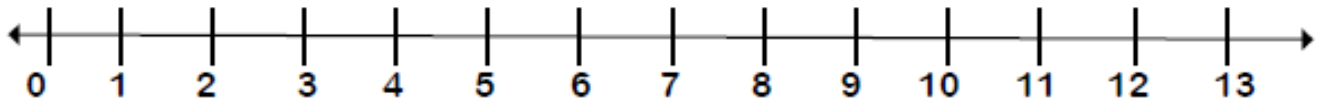
$$\boxed{13} - \boxed{4} = \boxed{}$$



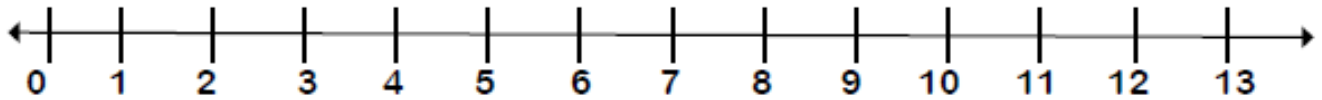
$$\boxed{15} - \boxed{7} = \boxed{}$$

RESTA EN LA RECTA NUMÉRICA

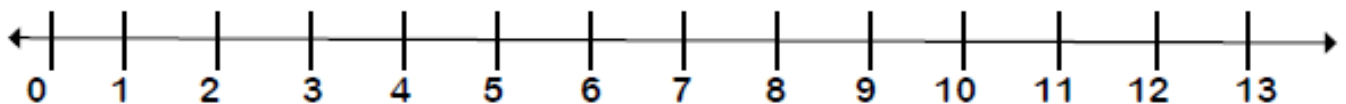
- Escribe la respuesta en el recuadro que se encuentra a la derecha.



$$\boxed{12} - \boxed{6} = \boxed{}$$



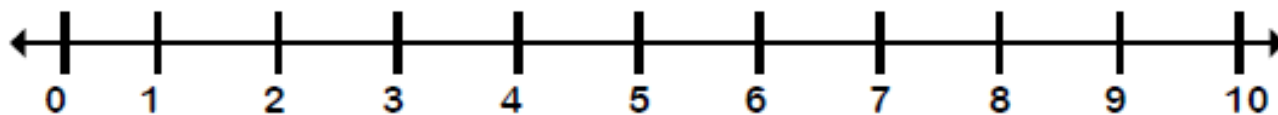
$$\boxed{13} - \boxed{7} = \boxed{}$$



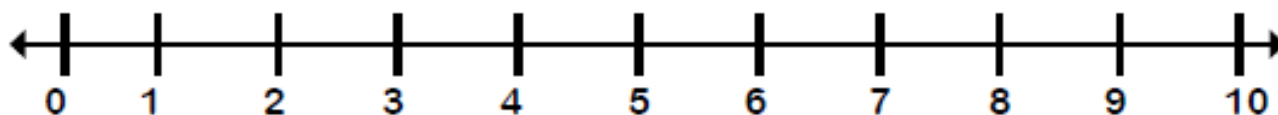
$$\boxed{12} - \boxed{5} = \boxed{}$$

RESTA EN LA RECTA NUMÉRICA

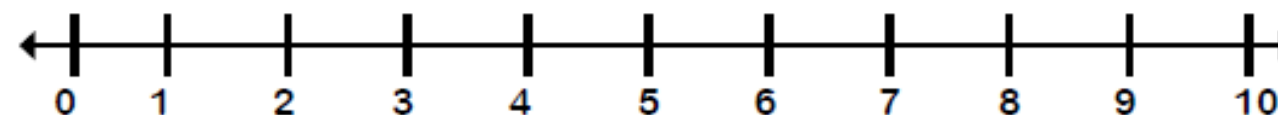
- Escribe la respuesta en el recuadro que se encuentra a la derecha.



$$\boxed{8} - \boxed{4} = \boxed{}$$



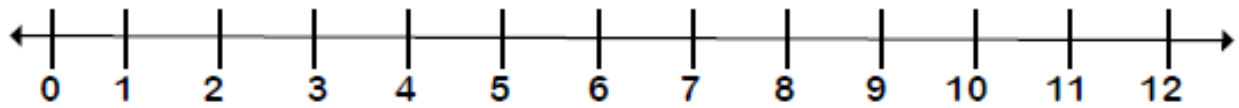
$$\boxed{10} - \boxed{5} = \boxed{}$$



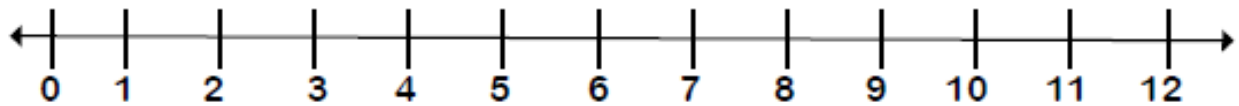
$$\boxed{10} - \boxed{6} = \boxed{}$$

SUMAS EN LA RECTA NUMÉRICA

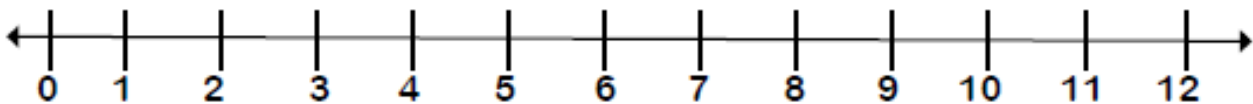
- Escribe la respuesta en el recuadro que se encuentra a la derecha.



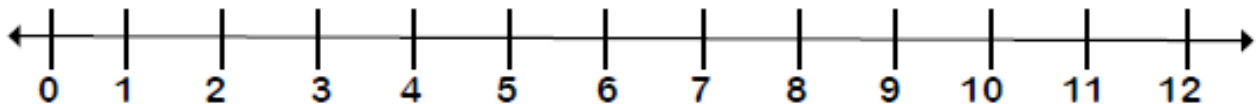
$$\boxed{7} + \boxed{4} = \boxed{}$$



$$\boxed{6} + \boxed{5} = \boxed{}$$



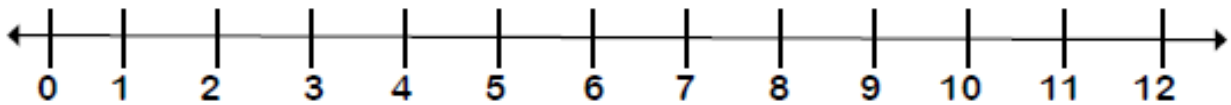
$$\boxed{5} + \boxed{7} = \boxed{}$$



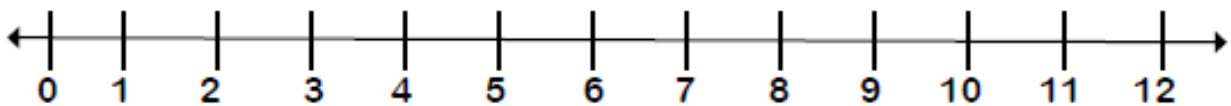
$$\boxed{4} + \boxed{8} = \boxed{}$$

SUMAS EN LA RECTA NUMÉRICA

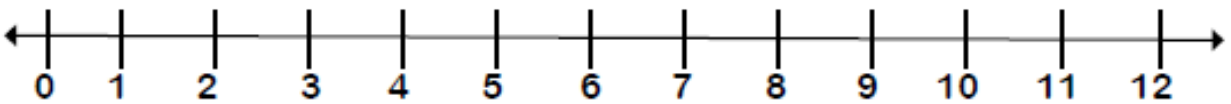
- Escribe la respuesta en el recuadro que se encuentra a la derecha.



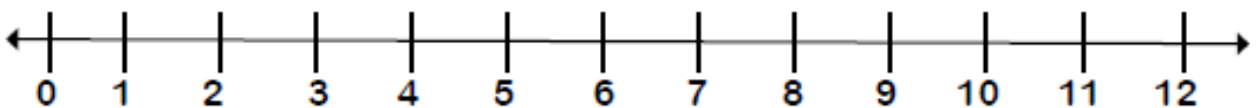
$$\boxed{5} + \boxed{5} = \boxed{}$$



$$\boxed{6} + \boxed{6} = \boxed{}$$



$$\boxed{8} + \boxed{4} = \boxed{}$$



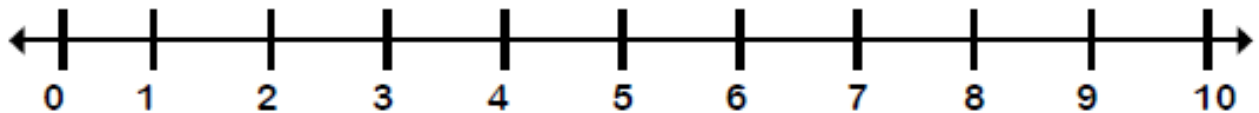
$$\boxed{7} + \boxed{5} = \boxed{}$$

SUMAS EN LA RECTA NUMÉRICA

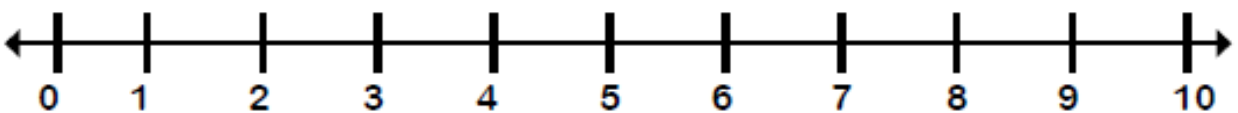
- Escribe la respuesta en el recuadro que se encuentra a la derecha.



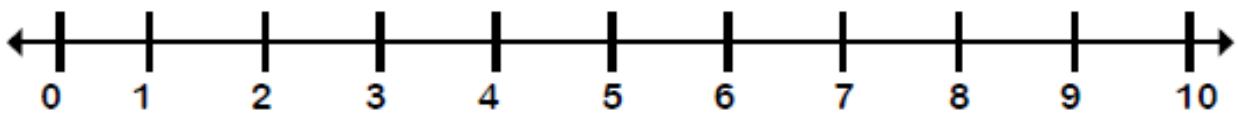
$$\boxed{2} + \boxed{2} = \boxed{4}$$



$$\boxed{5} + \boxed{2} = \boxed{}$$



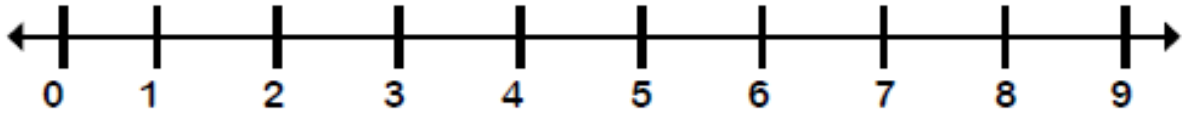
$$\boxed{6} + \boxed{4} = \boxed{}$$



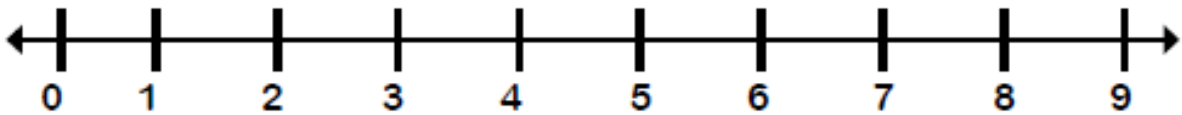
$$\boxed{3} + \boxed{5} = \boxed{}$$

SUMAS EN LA RECTA NUMÉRICA

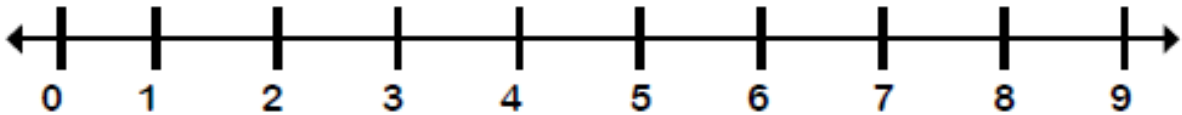
- Escribe la respuesta en el recuadro que se encuentra a la derecha.



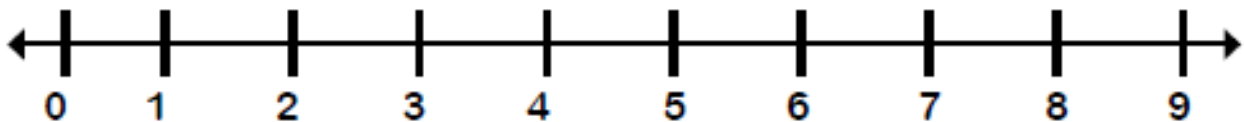
$$\boxed{3} + \boxed{3} = \boxed{}$$



$$\boxed{4} + \boxed{5} = \boxed{}$$

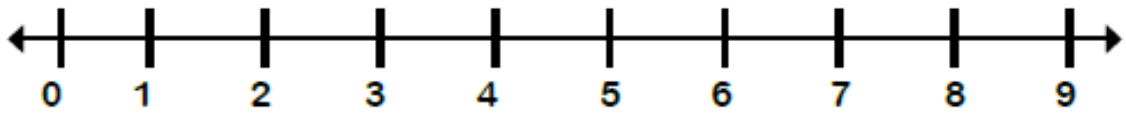


$$\boxed{4} + \boxed{4} = \boxed{}$$

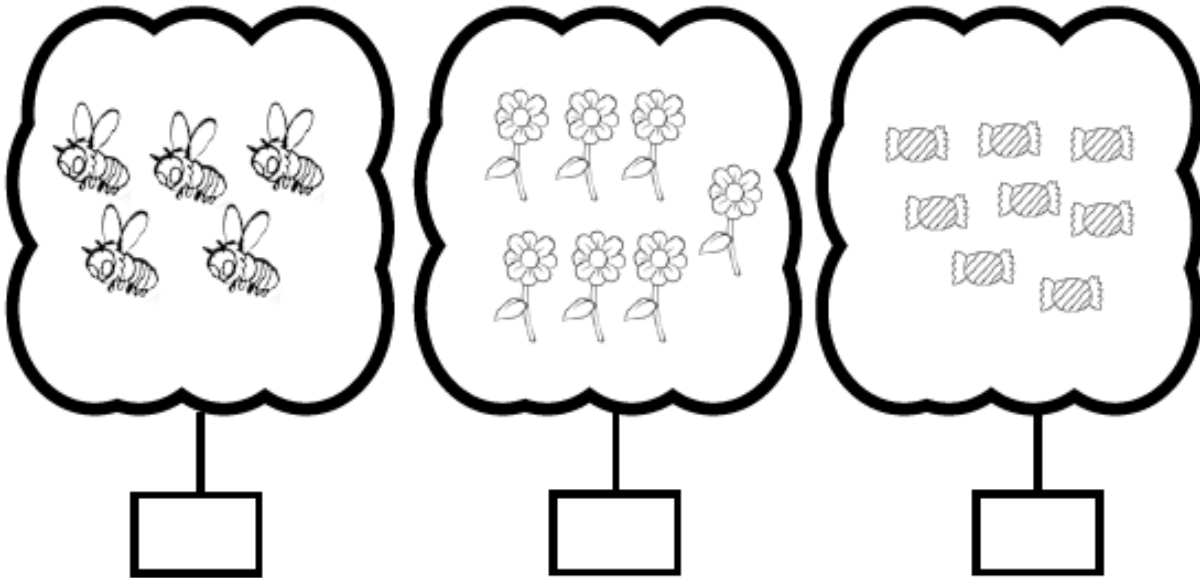


$$\boxed{5} + \boxed{2} = \boxed{}$$

LA RECTA NUMÉRICA



- Observa, cuenta y escribe el número que corresponde.



- Representación numérica:

